

CLASS V - HOLIDAY HOME WORK



DEAR STUDENTS

- ❖ The beginning of new session might not have been with pomp and show, but the spirit of teaching learning continues in the school.
- ❖ The summer vacations this time would not be ice creams, candies and cool pool, but time can be utilized in honing skills and interests.
- ❖ It is easy to bloom, then to be a bud, but you are responsible young members of the nation and it's our duty to follow rules.
- ❖ Here are some holiday activities designed for creative utilization of time. Give a flight to your imagination and spend time purposely.

SOME POINTS TO BE REMEMBER

- ❖ Holiday Homework is a part of subject enrichment and will be assessed on the basis of creativity and efforts of the students.
- ❖ It's the perfect time to enhance your speaking skills and vocabulary by conversing in English with your family and siblings.
- ❖ Reading is essential for those who seek to rise above the ordinary.
- ❖ A beautiful handwriting makes a good impression. Practice one page of English and Hindi handwriting daily.
- ❖ Schedule your time for activities so that there is no piling up for the last moment.

MATH

ACTIVITY 1

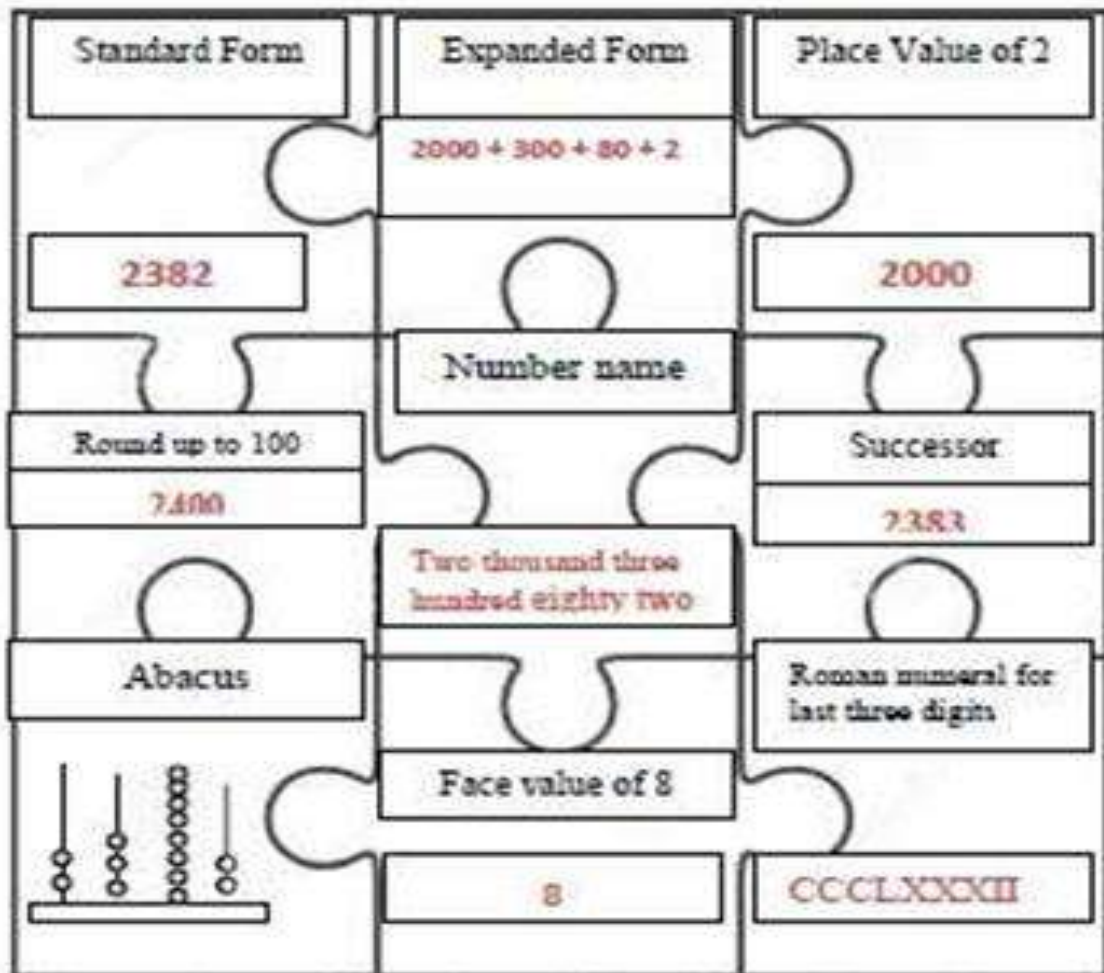
NUMBER SYSTEM

Make a model for Indian system of numeration and International system of numeration with the help of link given below.

<https://youtu.be/AU-q24rLjgk?si=Sweoky4ZYuzp6kLg>

ACTIVITY 2 BE CREATIVE-MAKE YOUR OWN GAME

During the vacations, we can create our own indoor games and also enhance our mathematical concepts. A sample is given below. Create your own JIG-SAWPUZZLE(using cardboard pieces).Select any six out of given nine questions. Compile them together in a small box.



ACTIVITY 3

Note down the date of birth of atleast 5 members of your family and write the roman numerals in the given format.

Name	Date of birth	Roman numeral

ACTIVITY 4

Write down the population of any 10 countries.

- ❖ Write the names of the states.
- ❖ Write the population in Indian and International System of Numeration.
- ❖ Arrange them in Ascending Order and Descending Order.
- ❖ Find out state with maximum and minimum population.
- ❖ Note down the Prices of three Home appliances.in 5-digit or 4 digits. And add them.

ENGLISH

I) Grammar:

Parts of speech are like the pieces of a jigsaw puzzle. They all look different, but each part of speech has a specific place in a sentence, where it fits in.

Make at least two flash cards for each part of speech and fill the given table. The flash cards can be submitted to the respective English teacher on reopening day.

For example: Wow! The smart teacher explains the work to us carefully so that we understand.

S.No.	Noun	Pronoun	adjective	verb	preposition	adverb	conjunction	interjection	article
1)	teacher, work	Us,we	smart	explains	to	carefully	so,that	wow	the
2)									
3)									

II) CREATIVE WRITING:

In which picture do you think the tiger has a better life?



Imagine that you are a tiger who has been caught. You are taken to a zoo and kept in a cage. Write a paragraph in an A4 sheet of about 100 words describing a day in your life in the zoo. Think about these points while discussing your answer:

- ❖ How does an animal feel when it is put in a cage?
- ❖ Are animals in zoos taken care of when they fall sick?
- ❖ How do they feel when people come to see them?

The Queen Bee

Read the story. Then answer the questions.

Two king's sons once started to seek adventures, and fell into a wild way of living. Their youngest brother, Witting, had remained behind, when at last he found them they all three went on until they came to an ant-hill, which the brothers wished to stir up, but Witting said, "I will not suffer them to be disturbed." And then they came to a lake, where a number of ducks were swimming. They wanted to cook them, but Witting said, "I will not suffer them to be killed." Then they came to a bee's-nest in a tree, they wanted to make a fire beneath the tree then they could get at the honey. But Witting said, "I will not suffer them to be stifled." At last the three brothers came to a castle they went through all the rooms until they look into the one room. They saw a grey-haired man they called out to him; he came out. He led them to a table loaded with good things, and when they had eaten he showed to each his bed-chamber. The next morning the grey man brought the eldest brother to a table of stone, on which were written three things: The first thing was, that in the wood under the moss lay the pearls a thousand in number and they were to be sought for, and if the task had not finished it by sunset, he must be turned to stone. So the eldest brother went out, but at the end of it he had only found one hundred; and he was turned into stone. The second brother went next day, he found two hundred pearls, and was turned into stone. At last it was Witting's turn, and he searched in the moss; but he grew so out of heart that he began to weep. Then, up came the ant-king with five thousand ants, whose lives had been saved by Witting, and the insects had collected all the pearls. Now the second thing was to get the key of the princess's sleeping-chamber out of the lake. And when he came to the lake, the ducks whose lives he had saved came, and brought up the key from the bottom. The third thing was choosing out the youngest of the three princesses, as they lay sleeping. Before they went to sleep each one had eaten a sweetmeat, the eldest a piece of sugar, the second a little syrup, and the third a spoonful of honey. Now the Queen-bee of those bees that Witting had saved came and that the king's son knew which to choose. Then the spell was broken; every one awoke from stony sleep. Witting married the youngest princess, and became king after her father's death.

Answer each question.

- 1. How many times did Witting prevent his brothers and why?**
- 2. What did happen when they reach the castle?**
- 3. Did the eldest brothers finish the three tasks?**
- 4. How Witting did complete the tasks?**

THE OLYMPIC GAMES


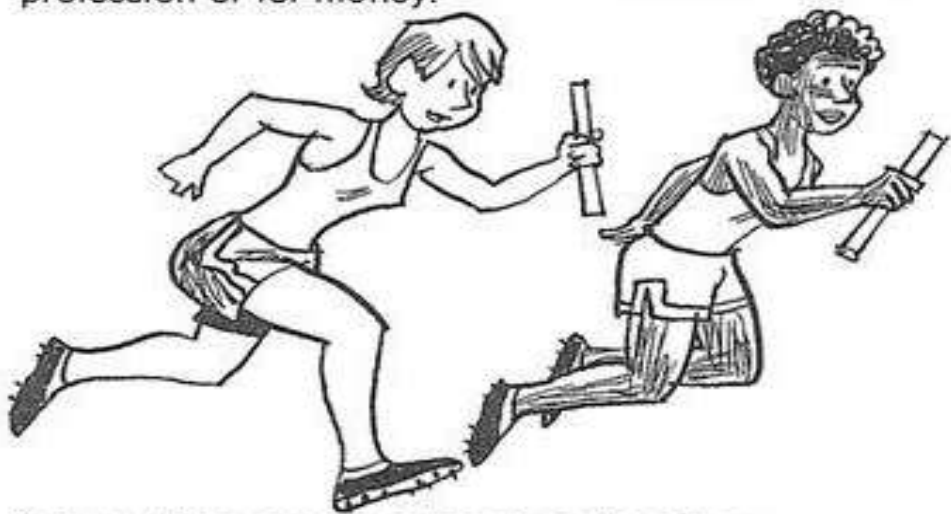
The first known Olympic Games were held in western Greece and were for male contestants and male spectators only.

Today's modern Olympic Games are open to men and women athletes from all over the world. They take place every four years and bring together the world's best amateur athletes to compete against one another. The Olympics are divided into Summer Games and Winter Games. The Summer Games involve competition in twenty-one different sports. The Winter Games include seven sports and last about ten days.

Colorful ceremonies open the Olympics and help to create a feeling of excitement. The Olympic flag is raised during these opening ceremonies. Trumpets play and cannons boom in salute. Hundreds of doves are released into the air as a symbol of peace.

The Olympic symbol consists of interlocking rings. These rings are black, blue, green, red, and yellow. The flag of each nation competing in the Olympic Games has at least one of these colors. The rings represent the continents of Africa, Asia, Europe, Australia, and North and South America.

Those countries that participate in the Olympics have a committee that selects the athletes who compete in the games. The athlete may be any age but must be an amateur. An amateur is someone who participates in a sport for pleasure, not as a profession or for money.



Answer these questions based on the story.

1. How often do the Olympic Games take place? _____

2. Name the six continents from which participants compete in the Olympics.

3. Where were the first Olympic Games held? _____
4. How do today's Olympics differ from those of ancient Greece? _____

Many tourists I have met have told me that one place they have to go is the weekend market. This market is huge and has everything from bags, souvenirs and handicrafts to many kinds of animal and many kinds of plants. It also has a fantastic variety of local food. In other words, the weekend market is a great place for shopping and experiencing the local culture.

The market is located near the city's main bus station so people come from all over the country to buy and sell goods. Moreover, it is also near a sky train station and a subway station which makes it very convenient for city people, especially young people who don't have cars. The market is very large and full of hundreds of small shops and stalls. Consequently, it can be confusing to get around. However, if you get lost, it is a good idea to look for the clock tower which is right in the middle of the market. It will help you find your way.

When I walk into the market early on a Sunday morning there are people and cars and motorcycles everywhere. You have to be careful where you walk. Many people are bringing their goods to sell in big bags on carts and trolleys. In fact, you might even have to jump out of the sellers' way as they charge along the narrow walkways with their goods. In addition to the sellers, tourists and locals are pouring in looking for something to eat or ready to start shopping. As time goes by, the market gets more and more crowded and you have to start squeezing past people to keep moving.

As you walk through the market you will experience many sensations. For example, there are many smells, scents and aromas. One moment you will be smelling the aromas of stir-fried cooking dishes from a small restaurant and the next you smell the scents of orchids and other flowers as you pass through the cooler and more relaxing garden section. Furthermore, walking deeper into the market, your eyes will have trouble recording so many products with their many colors, designs and sizes. After a while you may feel dizzy and look for a quiet place to have a rest and a refreshing drink. Fortunately, there are many small cafes and drink stalls selling fresh coconut juice, orange juice or iced water.

To sum up, a day at the weekend market is both a day of shopping and a unique experience for your senses. It is a kind of magical journey that is great as a first experience for tourists and an escape from daily life for locals. Moreover, while it is usually hot and crowded, the atmosphere is friendly and good-natured.

1 Why is the weekend market a great place to go on the weekend ?

2 Why can the market be confusing ?

3 How might you feel when walking through the crowded parts of the market ?

4 What do you have to be careful about as you walk through the market ?

5 Why is the market described as a "magical journey" ?

Library/English- listening activity

Listen to any two stories of your choice from the 'CBSE reading app' and write the summary in about 10 to 12 sentences on an A4 sheet.

Download Instructions: The app is available on play stores.

Search for "CBSE reading app" in the respective store's search bar, and follow the prompts to download and install.

After installing the app, you might need to register your child's name using the school affiliation no. which is available on the cover page of the school diary to access the app's content.

Once logged in, explore the features and content available on the CBSE reading app.

HINDI

हमारे शहर हैदराबाद के दर्शनीय स्थलों के चित्र चिपकाकर उनके नाम लिखिए।

Paste famous pictures of our city Hyderabad and write their names.

TELUGU

పెద్ద అయిన తరువాత నువ్వు ఏమి అవ్వాలని అనుకుంటున్నావో ఆ చిత్ర పటాన్ని గీసి రంగులు వేయండి.

ART

CREATE YOUR OWN CARTOON CHARACTER.

SOCIAL SCIENCE

I. Collect information of any three well-known historical buildings/monuments of India and fill in the tabular form. One has been done for you. Paste the pictures of the same in the scrap book.

	Things to find	Details
1.	Name of the building	Golconda Fort
	Person/King who constructed the building	Originally constructed by the Kakatiya dynasty in the 13 th century. However, the fort underwent significant expansions and renovations under the QutubShahi dynasty, particularly during the reign of Sultan QuliQutub Shah in the 16 th century.
	Place and state and place where the building is located	Hyderabad, Telangana
	Threats to the building	It's in a dilapidated condition because of wear and tear and climatic conditions.
	Suggestions to preserve the building	Not to scribble on the walls. Has to be properly maintained by the authorities.

II. Not just humans but birds also migrate. Have you heard about any birds which migrate? Collect information about any 3 migratory birds and fill in the table for each . One has been done for you.

Paste the pictures of the same in the scrap book.

	Things to find	Details
1.	Name of the bird	Greater Flamingo
	The country from which it starts its journey	Mediterranean region, the Middle East and South Asia
	Destination spot	Rann of Kutch
	Time taken for travel	Kilometres or more in a few days to weeks.
	Reason for its migration	Suitable feeding and breeding grounds.
	How long do they stay in the destined spot?	During winter season , from October to March

SCIENCE

Instructions to students

- ❖ Do the given activities and make a portfolio using A4 sheets.
- ❖ Stick the relevant pictures.
- ❖ Submit to your science teacher on school reopening day. Refer block 6 in your content book.

ACTIVITY 1

Gather information about 6 crops majorly grown in India.

- Name the types of crops according to the seasons they are grown in.

ACTIVITY 2

Grow your own kitchen garden. Sow seeds of tomato and chilly seeds.

Grow a few tomatoes and chilly plants in your kitchen garden.

- Take pictures of them during their growth and stick the printouts.
- Write important steps of crop production in order to get a good crop.

ACTIVITY 3

There are animals that destroy the crop before it is harvested. Farmers find it difficult to protect the crops from these animals, insects and microorganisms.

- What are these animals/insects called? Name few of them.
- What methods do the farmers employ to protect their crops?
- Name some common insecticides used to protect crops.
- Write the difference between insecticide and pesticide.

ACTIVITY 4

Write a short note on any 1 harvest festival that is celebrated in your state and its significance.